

Name:

Date: Wednesday, November 16, 2016



---

**MATH 181 F1 Worksheet: Escher Tilings, Part 1**

---

Look at the following prints by M.C. Escher. Which can be made using translations alone (consider the translation criterion)?

What region are you using as a “tile”?



Name:

Date: Wednesday, November 16, 2016

---

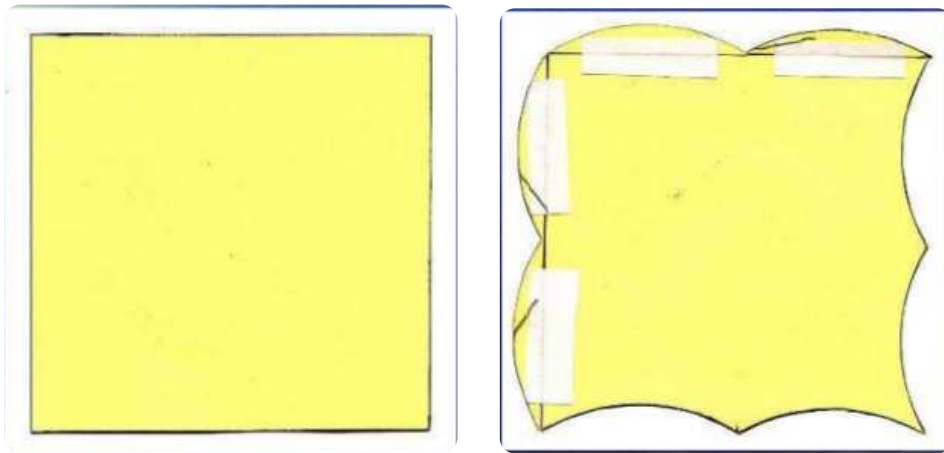
**MATH 181 F1 Worksheet: Escher Tilings, Part 2**

---

**Making our own Escher-like tilings!**

**Step 1: Start with a shape that will tile.**

**Step 2: Cut off segments and tape to the opposite side.**



**Try starting with these!**

