

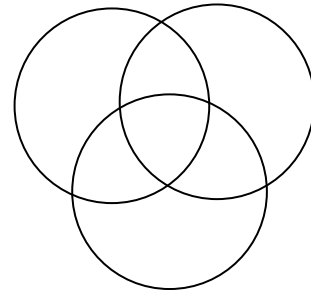
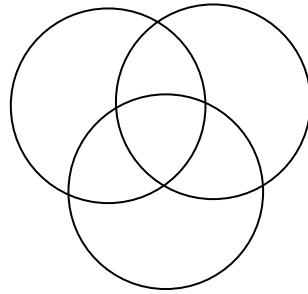
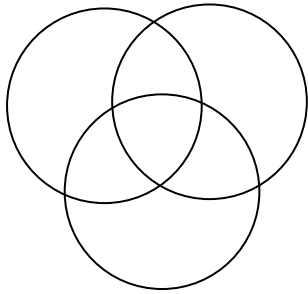
Name:

Date: Monday, September 12, 2016

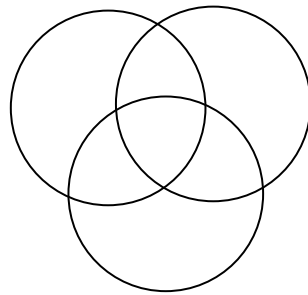
MATH 181 F1 Worksheet: Binary Codes

Question 1:

Use the Circle Diagram Method to find code words for 1010, 0100, and 0111.



Question 2: If you receive the message 1010010, then what can you conclude?



Question 3: If you receive the message 1011010, then what can you conclude?

